

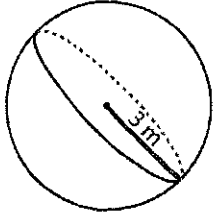
Name : \_\_\_\_\_

Score : \_\_\_\_\_

### Volume - Sphere & Hemisphere

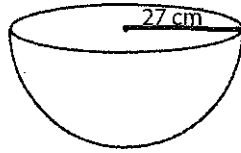
Find the exact volume of each shape.

1)



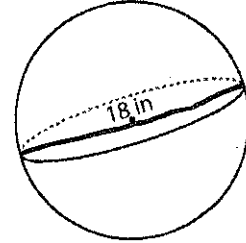
Volume = \_\_\_\_\_

2)



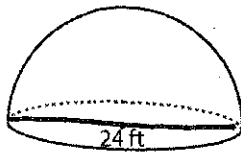
Volume = \_\_\_\_\_

3)



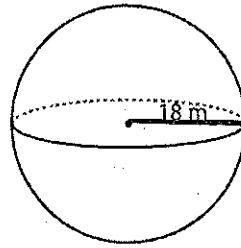
Volume = \_\_\_\_\_

4)



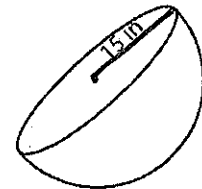
Volume = \_\_\_\_\_

5)



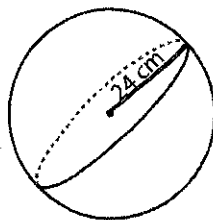
Volume = \_\_\_\_\_

6)



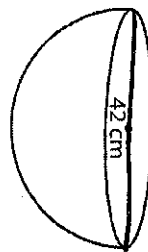
Volume = \_\_\_\_\_

7)



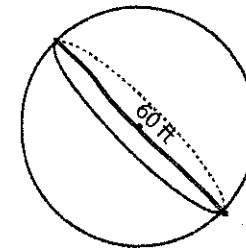
Volume = \_\_\_\_\_

8)



Volume = \_\_\_\_\_

9)



Volume = \_\_\_\_\_

10) A spherical ball has a radius of 6 centimeter. Calculate the volume of the ball.

Volume = \_\_\_\_\_